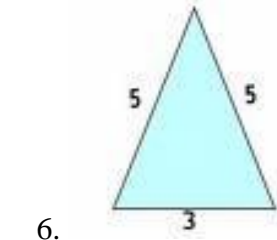
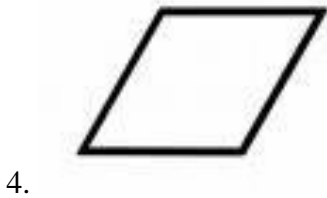
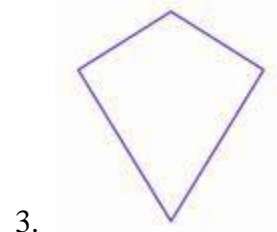
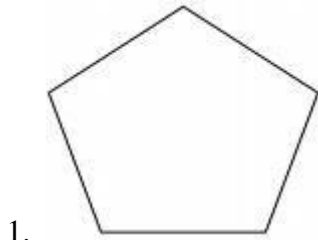


## NAMING POLYGONS

Upon entering any math education courses, you should be familiar with the general shapes and concepts associated with: Triangles (scalene, isosceles, and equilateral; acute, obtuse, and right); Quadrilaterals (trapezoids, parallelograms, rhombuses, rectangles, squares, and kites); Regular Polygons (pentagons, hexagons, heptagons, octagons, nonagons, decagons, dodecagons)

### Practice:

Name the following shapes:



### Answers:

1. Pentagon    2. Octagon    3. Kite    4. Rhombus    5. Nonagon    6. Isosceles triangle